

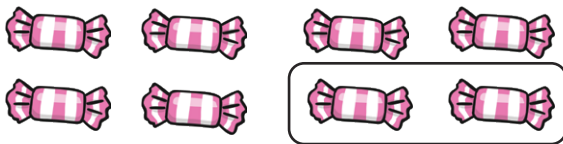
Finding Quarter

Find a quarter of these amounts. Use counters or buttons to help, or draw circles around the pictures to find the answer. The first one has been done for you.

8

sweets

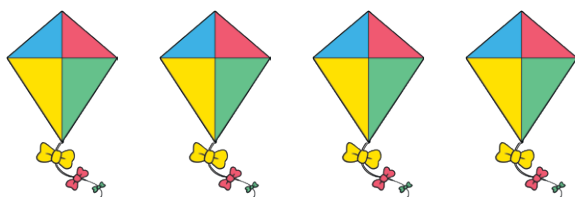
Quarter of 8 is 2



$$\frac{1}{4} \text{ of } 8 = 2$$

kites


Quarter of is



$$\frac{1}{4} \text{ of } \square = \square$$

cats

Quarter of is



$$\frac{1}{4} \text{ of } \square = \square$$

flowers

Quarter of is



$$\frac{1}{4} \text{ of } \square = \square$$

trees

Quarter of is



$$\frac{1}{4} \text{ of } \square = \square$$

stars

Quarter of is

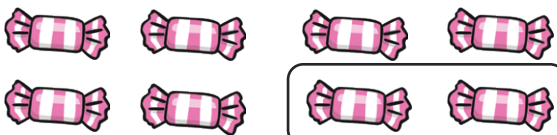


$$\frac{1}{4} \text{ of } \square = \square$$

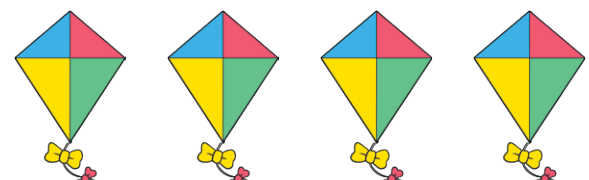
Finding Quarter

Find a quarter of these amounts. Use counters or buttons to help, or draw circles around the pictures to find the answer. The first one has been done for you.


Quarter of **8** is **2**

8 sweets  $\frac{1}{4}$ of **8** = **2**

Quarter of is

kites  $\frac{1}{4}$ of =

Quarter of is

cats  $\frac{1}{4}$ of =

Now try these:

Draw 4 stars then find a quarter.

Draw 16 flowers then find a quarter.

$\frac{1}{4}$ of **4** = Quarter of **4** is

$\frac{1}{4}$ of **16** = Quarter of **16** is

Finding Quarter

Draw 8 stars then find a quarter.

Draw 12 flowers then find a quarter.

$$\frac{1}{4} \text{ of } 8 = \square$$

$$\frac{1}{4} \text{ of } 12 = \square$$

Complete these number sentences.

Quarter of **4** is

$$\frac{1}{4} \text{ of } 28 = \square$$

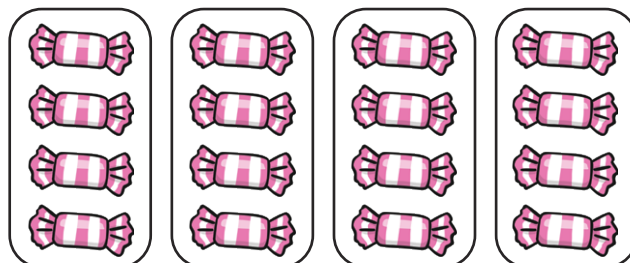
Quarter of **36** is

$$\frac{1}{4} \text{ of } 20 = \square$$

Quarter of **24** is

$$\frac{1}{4} \text{ of } 32 = \square$$

Write your own number sentence for this picture.

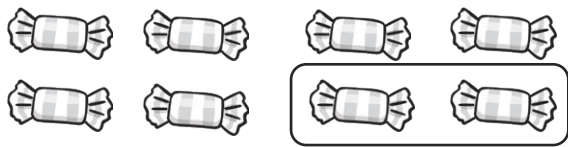


Finding Quarter Answers

Find a quarter of these amounts. Use counters or buttons to help, or draw circles around the pictures to find the answer. The first one has been done for you.

Quarter of **8** is **2**

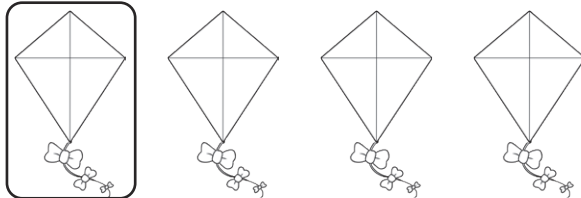
8 sweets



$\frac{1}{4}$ of **8** = **2**

Quarter of **4** is **1**


4 kites



$\frac{1}{4}$ of **4** = **1**

Quarter of **12** is **6**

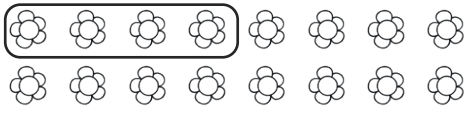
12 cats



$\frac{1}{4}$ of **12** = **3**

Quarter of **16** is **4**


16 flowers



$\frac{1}{4}$ of **16** = **4**

Quarter of **24** is **6**

24 trees



$\frac{1}{4}$ of **24** = **6**

Quarter of **20** is **5**

20 stars




$\frac{1}{4}$ of **20** = **5**

Finding Quarter Answers

Find a quarter of these amounts. Use counters or buttons to help, or draw circles around the pictures to find the answer. The first one has been done for you.

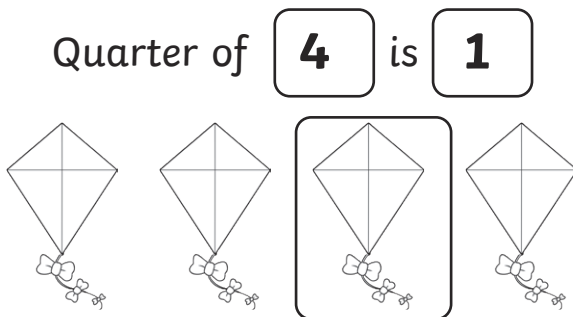
Quarter of **8** is **2**

8 sweets $\frac{1}{4}$ of **8** = **2**




Quarter of **4** is **1**

4 kites $\frac{1}{4}$ of **4** = **1**




Quarter of **12** is **3**

12 cats $\frac{1}{4}$ of **12** = **3**



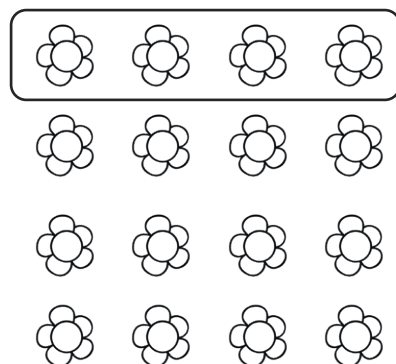
Now try these:

Draw 4 stars then find a quarter.



$\frac{1}{4}$ of **4** = **1** Quarter of **4** is **1**

Draw 16 flowers then find a quarter.



$\frac{1}{4}$ of **16** = **4** Quarter of **16** is **4**

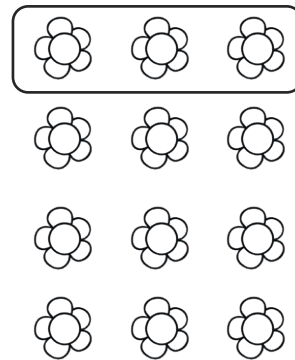
Finding Quarter Answers

Draw 8 stars then find a quarter.



$$\frac{1}{4} \text{ of } 8 = \boxed{2}$$

Draw 12 flowers then find a quarter.



$$\frac{1}{4} \text{ of } 12 = \boxed{3}$$

Complete these number sentences.

Quarter of **4** is

$$\frac{1}{4} \text{ of } 28 = \boxed{7}$$

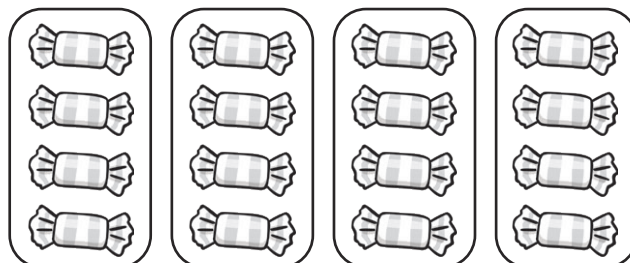
Quarter of **36** is

$$\frac{1}{4} \text{ of } 20 = \boxed{5}$$

Quarter of **24** is

$$\frac{1}{4} \text{ of } 32 = \boxed{8}$$

Write your own number sentence for this picture.



Quarter of **16** is **4**

$$\frac{1}{4} \text{ of } 16 \text{ is } 4$$